




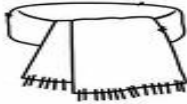




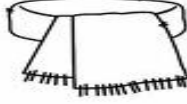
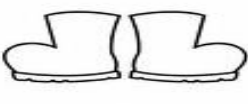
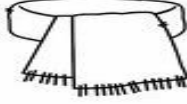
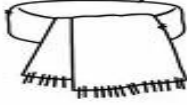
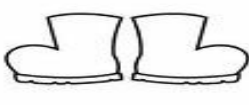
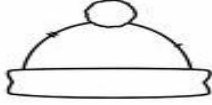
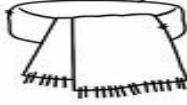
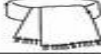




ATIVIDADES PARA O SITE CONECTADOS DA VILA - 13ª SEMANA

MATEMÁTICA






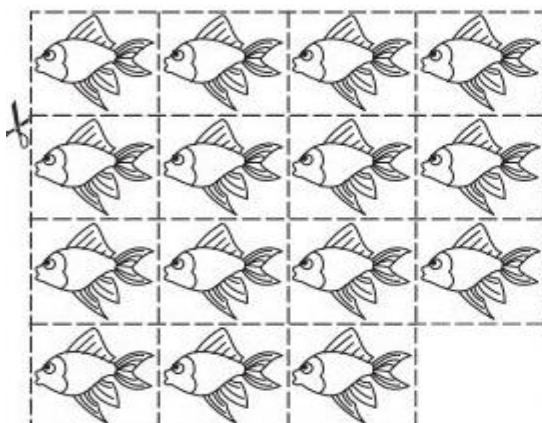




MARQUE UM X NAS QUANTIDADES ENCONTRADAS.

					
					
					
5					
4					
3					
2					
1					
					

https://br.pinterest.com/angelitapesquis/sequencia-numerica/?nic_v1=1aITxROlcy%2Bowlz4yAhQgP9%2FzFgpKJXP7eLDHMHYJkI2vlyAmd9sI%2FI1n1SHjJ61L

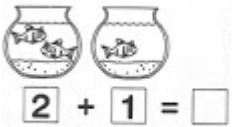
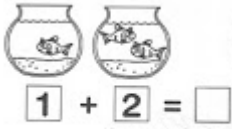


3 - VAMOS RECORTAR E COLAR AS QUANTIDADES CORRETAS DE PEIXINHOS EM CADA AQUÁRIO?





4 - AGORA VAMOS CONTAR OS PEIXINHOS QUE ESTÃO NO AQUÁRIO E REGISTRAR NO QUADRO ABAIXO.



<https://www.espacoeducar.net/2011/08/atividades-relacionadas-ao-projeto-meio.html>

VAMOS CONTAR ESSAS DELICIOSAS FRUTINHAS E REGISTRAR NOS QUADROS ABAIXO.

 $3 + 4 = \square$	 $2 + 3 = \square$
 $1 + 2 = \square$	 $5 + 5 = \square$
 $7 + 8 = \square$	 $4 + 6 = \square$

https://br.pinterest.com/fia_fortunato/africanidade/



**PREFEITURA DE
VILA VELHA**




Núcleo de
EDUCAÇÃO ESPECIAL

SEMED / PMVV

**SECRETARIA MUNICIPAL
DE EDUCAÇÃO**

Rua Castelo Branco, 1803, Centro,
Vila Velha - ES - CEP.29100-041
Telefone: (27) 3389.7231

5 - AGORA VOCÊ É O ARTISTA DA VEZ! COM A AJUDA DA MAMÃE VAMOS PASSAR TINTA GUACHE LARANJA EM UMA DAS MÃOZINHAS E FAZER UM BELO DESENHO DO PEIXINHO DOURADO NO AQUÁRIO.



<https://br.pinterest.com/pin/524739794069767414/>